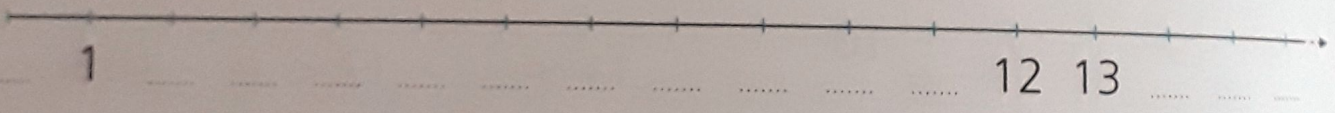


I NUMERI 14 - 15 - 16


1 Colora tanti quadratini quanti ne indica il numero.

14	<input type="checkbox"/> <input type="checkbox"/> <input type="checkbox"/> <input type="checkbox"/> <input type="checkbox"/>	<input type="checkbox"/> <input type="checkbox"/> <input type="checkbox"/> <input type="checkbox"/> <input type="checkbox"/>
	<input type="checkbox"/> <input type="checkbox"/> <input type="checkbox"/> <input type="checkbox"/> <input type="checkbox"/>	<input type="checkbox"/> <input type="checkbox"/> <input type="checkbox"/> <input type="checkbox"/> <input type="checkbox"/>
15	<input type="checkbox"/> <input type="checkbox"/> <input type="checkbox"/> <input type="checkbox"/> <input type="checkbox"/>	<input type="checkbox"/> <input type="checkbox"/> <input type="checkbox"/> <input type="checkbox"/> <input type="checkbox"/>
	<input type="checkbox"/> <input type="checkbox"/> <input type="checkbox"/> <input type="checkbox"/> <input type="checkbox"/>	<input type="checkbox"/> <input type="checkbox"/> <input type="checkbox"/> <input type="checkbox"/> <input type="checkbox"/>
16	<input type="checkbox"/> <input type="checkbox"/> <input type="checkbox"/> <input type="checkbox"/> <input type="checkbox"/>	<input type="checkbox"/> <input type="checkbox"/> <input type="checkbox"/> <input type="checkbox"/> <input type="checkbox"/>
	<input type="checkbox"/> <input type="checkbox"/> <input type="checkbox"/> <input type="checkbox"/> <input type="checkbox"/>	<input type="checkbox"/> <input type="checkbox"/> <input type="checkbox"/> <input type="checkbox"/> <input type="checkbox"/>

2 Completa la linea dei numeri.




3 Conta e registra sull'abaco. Poi scrivi il numero in lettere.




da _____

da



da _____




da _____

da

u

I NUMERI FINO A 16

1 Colora con lo stesso colore i pennarelli e i tappi con lo stesso numero.



2 Vero V o falso F? Scegli con una X.

- | | | |
|---|---|---|
| 13 > 18 <input type="checkbox"/> V <input type="checkbox"/> F | 13 > 11 <input type="checkbox"/> V <input type="checkbox"/> F | 16 = 16 <input type="checkbox"/> V <input type="checkbox"/> F |
| 9 < 16 <input type="checkbox"/> V <input type="checkbox"/> F | 14 > 11 <input type="checkbox"/> V <input type="checkbox"/> F | 12 < 9 <input type="checkbox"/> V <input type="checkbox"/> F |
| 14 = 15 <input type="checkbox"/> V <input type="checkbox"/> F | 15 < 10 <input type="checkbox"/> V <input type="checkbox"/> F | 17 > 19 <input type="checkbox"/> V <input type="checkbox"/> F |

3 Leggi che cosa dice la freccia e completa.

